


Blue to Red

Goalies to non-goalies

Red Goalies to all Blue

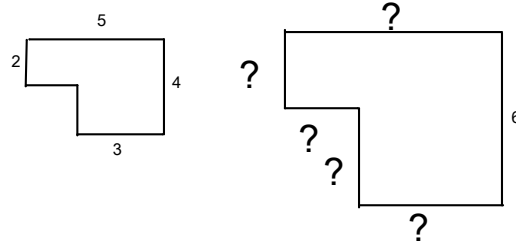
Forwards to Defense



What percent of players do not have a puck?

Move Me

The ratio of trucks to cars is 7 to 8. If there are a total of 21 trucks, how many cars are there?



Tax: 11%, Discount: 22% Commission: 6%

Item 1: Airplane (\$15.95)
 Discount: [D] [] [] [] []
 Tax: [T] [] [] [] []
 Commission: [C] [] [] [] []
 Final Price: [F] [] [] [] []

Item 2: Teddy Bear (\$32.99)
 Discount: [D] [] [] [] []
 Tax: [T] [] [] [] []
 Commission: [C] [] [] [] []
 Final Price: [F] [] [] [] []

Item 3: Swingset (\$459.99)
 Discount: [D] [] [] [] []
 Tax: [T] [] [] [] []
 Commission: [C] [] [] [] []
 Final Price: [F] [] [] [] []

Item 4: Kite (\$4.95)
 Discount: [D] [] [] [] []
 Tax: [T] [] [] [] []
 Commission: [C] [] [] [] []
 Final Price: [F] [] [] [] []

Out of 70 marks

69 =	[]	61 =	[]	53 =	[]	43 =	[]
68 =	[]	38 =	[]	68 =	[]	21 =	[]
62 =	[]	49 =	[]	62 =	[]	48 =	[]
57 =	[]	62 =	[]	61 =	[]	19 =	[]
43 =	[]	57 =	[]	61 =	[]	70 =	[]
57 =	[]	51 =	[]	60 =	[]		[]

- 1) What percentage of students got above 78%
- 2) What percentage of students did not achieve 50%
- 3) Given the grade scale:
 - > 86% = A How many students got an A _____
 - 75-85 = B How many students got an B _____
 - 70-74 = C+ How many students got an C+ _____
 - 60-69 = C How many students got an C _____
 - 50-59 = C- How many students got an C- _____
 - 0-49 = F How many students got an F _____

What percentage of students received A? B? C+? C? C-? and F?

answers to 1-4 - pull left.

1 - 61% 2 - 9%

3 - 11,4,2,3,1,2

4) 48, 17,9,13,4,9.

The ratio of boys to girls at the basketball game is 8:5.

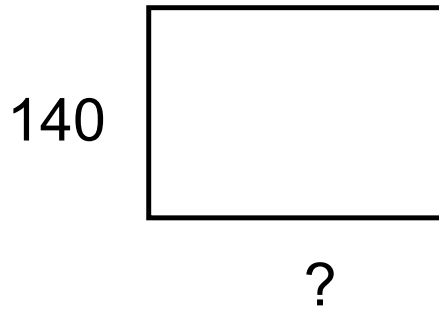
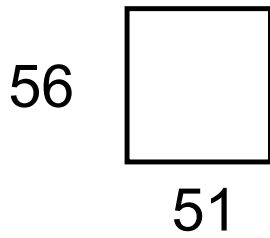

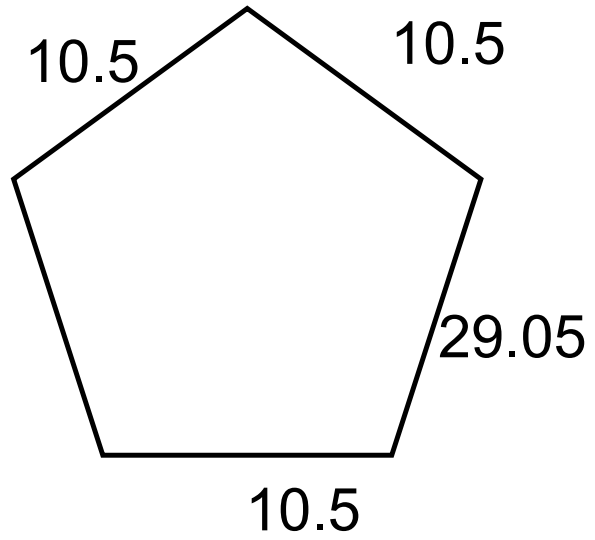
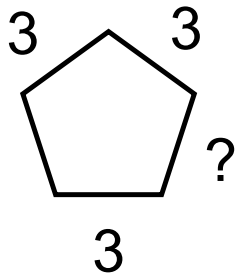
There are 30 girls. How many more boys are there than girls?

1. The ratio of the weight of Meg's cat to the weight of Anne's cat is 5:7. Meg's cat weighs 20 kg. How much more does Anne's cat weigh?

There are 3 packs of crayons available for every 5 students in the art class.

How many students can share 15 packs of crayons?

1. In a certain class, the ratio of passing grades to failing grades is 7 to 5. How many of the 36 students failed the course?



A Sense of Scale

1. Here is a recipe for making 4 pancakes:

6 tablespoons flour

$\frac{1}{4}$ pint milk

$\frac{1}{4}$ pint water

1 pinch salt

1 egg



You want to make 10 pancakes.

a. How much flour do you need?

b. How much milk do you need?

What is 10% of 30 _____

What is 5% of 30 _____

What is 1% of 30 _____

Explain how would you find 20% of 30 _____

Explain how you would find 8% of 30 _____

Estimate a 15 % tip on the following bills: (show your work)

\$34.67 _____

\$122.50 _____

Estimate the final price of the item with a 20% discount and 12% tax. (show your work)

\$29.99 _____

\$39.45 _____