

## Writing fractions in words

---

### Grade 2 Fractions Worksheet

Re-write each fraction in words.

$\frac{1}{2}$		$\frac{1}{3}$	
$\frac{1}{4}$		$\frac{1}{6}$	
$\frac{1}{8}$		$\frac{1}{10}$	
$\frac{2}{3}$		$\frac{3}{4}$	
$\frac{3}{5}$		$\frac{5}{6}$	
$\frac{7}{8}$		$\frac{9}{10}$	



# Convert improper fractions to mixed numbers

---

## Grade 4 Fractions Worksheet

Convert.

1.  $\frac{10}{3} =$  \_\_\_\_\_

2.  $\frac{7}{2} =$  \_\_\_\_\_

3.  $\frac{7}{5} =$  \_\_\_\_\_

4.  $\frac{38}{10} =$  \_\_\_\_\_

5.  $\frac{20}{12} =$  \_\_\_\_\_

6.  $\frac{3}{2} =$  \_\_\_\_\_

7.  $\frac{9}{5} =$  \_\_\_\_\_

8.  $\frac{13}{4} =$  \_\_\_\_\_

9.  $\frac{19}{5} =$  \_\_\_\_\_

10.  $\frac{7}{4} =$  \_\_\_\_\_

11.  $\frac{26}{12} =$  \_\_\_\_\_

12.  $\frac{12}{8} =$  \_\_\_\_\_

13.  $\frac{17}{8} =$  \_\_\_\_\_

14.  $\frac{16}{5} =$  \_\_\_\_\_

15.  $\frac{9}{6} =$  \_\_\_\_\_

16.  $\frac{19}{12} =$  \_\_\_\_\_

17.  $\frac{11}{6} =$  \_\_\_\_\_

18.  $\frac{5}{3} =$  \_\_\_\_\_

19.  $\frac{27}{10} =$  \_\_\_\_\_

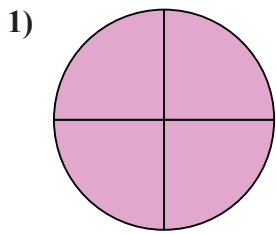
20.  $\frac{11}{4} =$  \_\_\_\_\_

21.  $\frac{10}{6} =$  \_\_\_\_\_

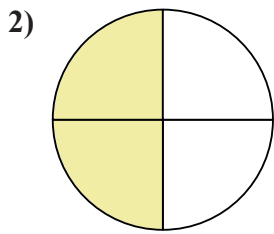


Determine which letter best describes the shaded portion.

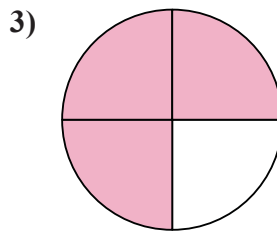
Answers



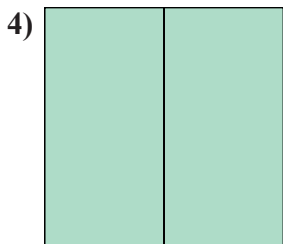
- A. Two Quarters
- B. Four Quarters
- C. One Quarter




- A. Two Quarters
- B. One Quarter
- C. Three Quarters



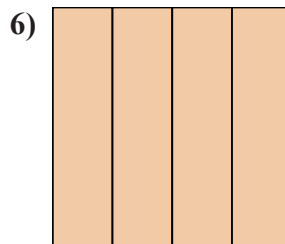
- A. Two Quarters
- B. One Quarter
- C. Three Quarters




- A. Two Halves
- B. Two Quarters
- C. One Quarter



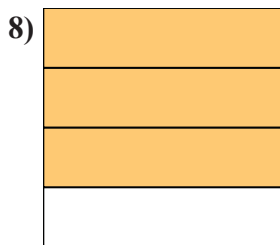
- A. Two Quarters
- B. One Quarter
- C. Three Quarters



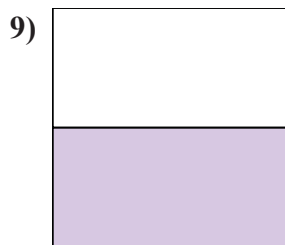
- A. Two Quarters
- B. Four-Fourths
- C. One Quarter



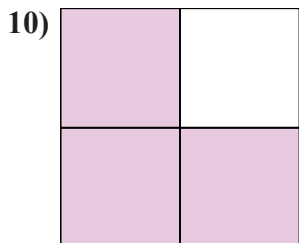
- A. Two Quarters
- B. One-Fourth
- C. Three Quarters



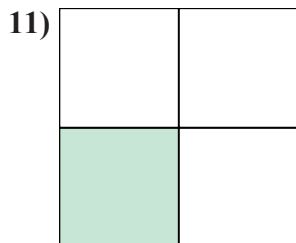
- A. Two Quarters
- B. Three-Fourths
- C. One Quarter



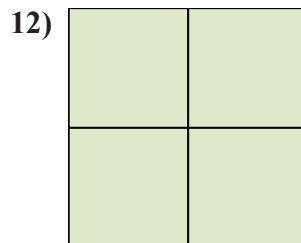
- A. One Quarter
- B. Three Quarters
- C. One Half



- A. One Quarter
- B. Three-Fourths
- C. Two Quarters



- A. Three Quarters
- B. Two Quarters
- C. One Quarter



- A. Four Quarters
- B. One Quarter
- C. Two Quarters

- 1. \_\_\_\_\_
- 2. \_\_\_\_\_
- 3. \_\_\_\_\_
- 4. \_\_\_\_\_
- 5. \_\_\_\_\_
- 6. \_\_\_\_\_
- 7. \_\_\_\_\_
- 8. \_\_\_\_\_
- 9. \_\_\_\_\_
- 10. \_\_\_\_\_
- 11. \_\_\_\_\_
- 12. \_\_\_\_\_



**Determine which choice best show the value written as a numeral.**

**Answers**

- |   |   |
|---|---|
| <p>1) one hundred fifty-five and thirty-four hundredths<br/>                 A. 155.43            B. 551.43            C. 551.34            D. 155.34</p> <p>2) two hundred twelve and seventy-three hundredths<br/>                 A. 212.7            B. 212.37            C. 212.73            D. 212.073</p> <p>3) six hundred twenty-six and fourteen thousandths<br/>                 A. 626.014            B. 626.0            C. 626.410            D. 626.0014</p> <p>4) forty-nine and ninety-eight thousandths<br/>                 A. 94.890            B. 49.098            C. 49.0098            D. 49.890</p> <p>5) ninety-six and seven hundred eighty-five thousandths<br/>                 A. 96.587            B. 96.0785            C. 96.785            D. 69.7</p> <p>6) eight hundred twenty-four and four hundred seventy-nine thousandths<br/>                 A. 428.4            B. 824.479            C. 824.00479            D. 428.974</p> <p>7) eighty-seven and five hundred ninety-eight thousandths<br/>                 A. 78.5            B. 87.598            C. 78.59            D. 87.00598</p> <p>8) nine hundred thirty-nine and nine thousandths<br/>                 A. 939.900            B. 939.009            C. 939.9            D. 939.00</p> <p>9) eighty-six and eighty-four thousandths<br/>                 A. 86.0084            B. 86.084            C. 68.480            D. 86.480</p> <p>10) fifty-four and eight hundred twenty-two thousandths<br/>                 A. 45.822            B. 54.0822            C. 54.822            D. 45.8</p> <p>11) five hundred seventy-three and seven hundred twenty-nine thousandths<br/>                 A. 375.729            B. 573.0729            C. 573.729            D. 573.00729</p> <p>12) two hundred eighty-three and sixty-eight hundredths<br/>                 A. 283.0068            B. 283.68            C. 283.068            D. 283.86</p> <p>13) ninety-one and seventy-five hundredths<br/>                 A. 91.75            B. 19.57            C. 19.7            D. 19.75</p> <p>14) three hundred fifty-six and fifty-five hundredths<br/>                 A. 653.5            B. 356.0055            C. 653.55            D. 356.55</p> <p>15) seventy-five and one hundred eighty-four thousandths<br/>                 A. 75.184            B. 57.18            C. 75.481            D. 75.00184</p> | <p>1. _____</p> <p>2. _____</p> <p>3. _____</p> <p>4. _____</p> <p>5. _____</p> <p>6. _____</p> <p>7. _____</p> <p>8. _____</p> <p>9. _____</p> <p>10. _____</p> <p>11. _____</p> <p>12. _____</p> <p>13. _____</p> <p>14. _____</p> <p>15. _____</p> |
|---|---|



Convert each problem to word form.

Ex) 73.273

seventy-three and two hundred seventy-three thousandths

1) 7.005

2) 983.53

3) 26.17

4) 693.152

5) 525.048

6) 3.026

7) 8.638

8) 795.09

9) 751.221

10) 4.445

11) 67.03

12) 5.838

13) 17.005

14) 68.065

15) 896.089

16) 123.76

17) 96.343

18) 36.4

19) 7.589

20) 38.3



**Convert each problem to numeric form.**

Ex) one hundred fifty-three and fifty-one hundredths

**Answers**

Ex. 153.51

1) one hundred seventy-five and seven hundred twenty-six thousandths

1. \_\_\_\_\_

2) six and three thousandths

2. \_\_\_\_\_

3) sixty-three and one tenth

3. \_\_\_\_\_

4) four hundred thirty-seven and eight hundred twenty-three thousandths

4. \_\_\_\_\_

5) eight hundred fifty-four and ninety-six hundredths

5. \_\_\_\_\_

6) four and eight tenths

6. \_\_\_\_\_

7) three hundred eighty-one and one thousandth

7. \_\_\_\_\_

8) one hundred seventy-five and one hundred fifty-five thousandths

8. \_\_\_\_\_

9) six and eleven hundredths

9. \_\_\_\_\_

10) one and eight tenths

10. \_\_\_\_\_

11) four hundred thirteen and nine hundred forty-one thousandths

11. \_\_\_\_\_

12) four hundred twenty-three and three hundred twelve thousandths

12. \_\_\_\_\_

13) one and twenty-six thousandths

13. \_\_\_\_\_

14) nine hundred seventy-six and five thousandths

14. \_\_\_\_\_

15) four and fourteen hundredths

15. \_\_\_\_\_

16) one and thirty-seven hundredths

16. \_\_\_\_\_

17) one hundred thirteen and two tenths

17. \_\_\_\_\_

18) five hundred sixty-three and seven thousandths

18. \_\_\_\_\_

19) three and one thousandth

19. \_\_\_\_\_

20) four hundred seventy-five and six hundredths

20. \_\_\_\_\_